







Writing a Numeral to Represent Members of a Set (Numbers 1-10)






(5)



(10)



(15)



(20)