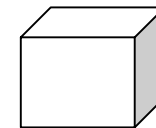
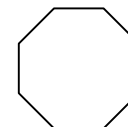

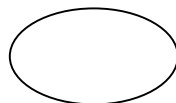
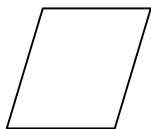
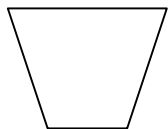


Geometric Shapes

Name: \_\_\_\_\_

**Directions:** Label each shape by writing its name on the line below it.



\_\_\_\_\_

\_\_\_\_\_

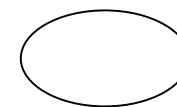
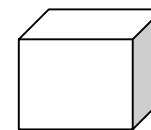
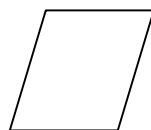
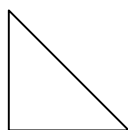
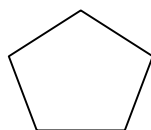
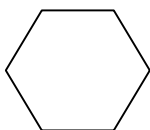

\_\_\_\_\_

\_\_\_\_\_

\_\_\_\_\_

\_\_\_\_\_

\_\_\_\_\_



(7)

\_\_\_\_\_

\_\_\_\_\_

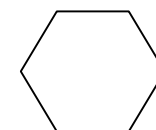
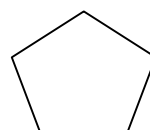
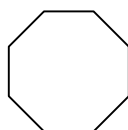
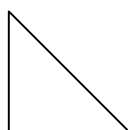
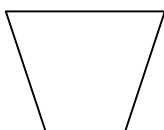

\_\_\_\_\_

\_\_\_\_\_

\_\_\_\_\_

\_\_\_\_\_

\_\_\_\_\_



(14)

\_\_\_\_\_

\_\_\_\_\_

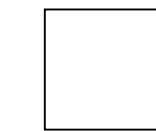
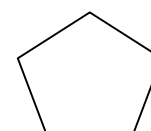
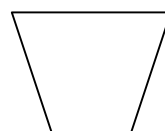
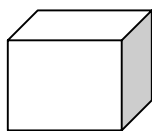
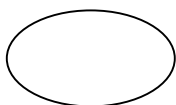

\_\_\_\_\_

\_\_\_\_\_

\_\_\_\_\_

\_\_\_\_\_

\_\_\_\_\_



(21)

\_\_\_\_\_

\_\_\_\_\_

\_\_\_\_\_

\_\_\_\_\_

\_\_\_\_\_

\_\_\_\_\_

\_\_\_\_\_

(28)