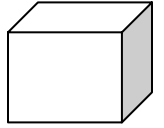
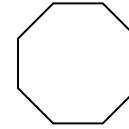

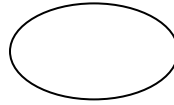
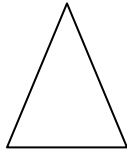
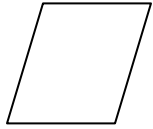
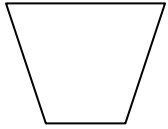


Geometric Shapes

Total Correct: _____

Directions: Label each shape by writing its name on the line below it.



Trapezoid

Parallelogram

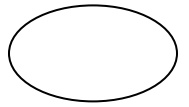
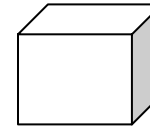
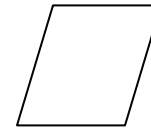
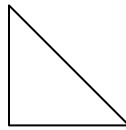
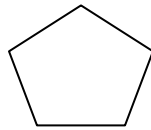
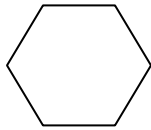

Isosceles Triangle

Oval

Rectangle

Octagon

Cube
(7)



Square

Hexagon

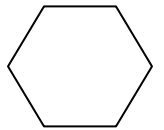
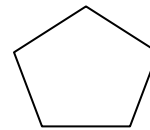
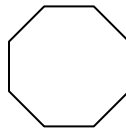
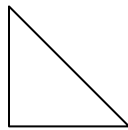
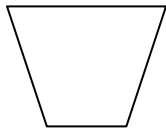
Pentagon

Right Triangle

Parallelogram

Cube

Oval
(14)



Rectangle

Trapezoid


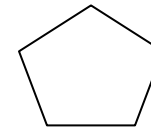
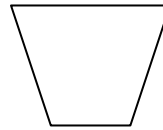
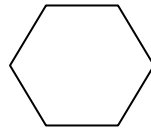
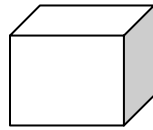
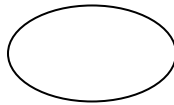

Right Triangle

Octagon

Pentagon

Isosceles Triangle

Hexagon
(21)



Square

Oval

Cube

Hexagon

Trapezoid

Pentagon

Square
(28)